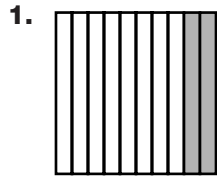
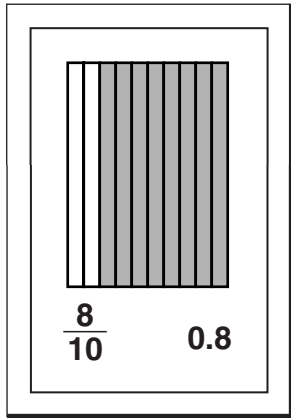




Tenths and Hundredths

Write a fraction and a decimal to describe each model.







Use grid paper. Draw a model to show each fraction. Then write each fraction as a decimal.

4. $\frac{6}{10}$

5. $\frac{40}{100}$

6. $\frac{7}{10}$

7. $\frac{92}{100}$

8. $\frac{63}{100}$

Use grid paper. Draw a model to show each decimal. Then write each decimal as a fraction.

9. 0.8

10. 0.46

11. 0.3

12. 0.33

13. 0.66

Problem Solving

14. Lucy writes the number $\frac{67}{100}$. Taylor writes the number 0.7. Are the numbers equivalent? Explain your answer.
